



Use the numberline to solve each problem. The first is marked for you.

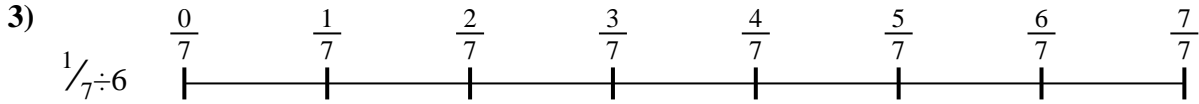
**Answers**




1. \_\_\_\_\_




2. \_\_\_\_\_



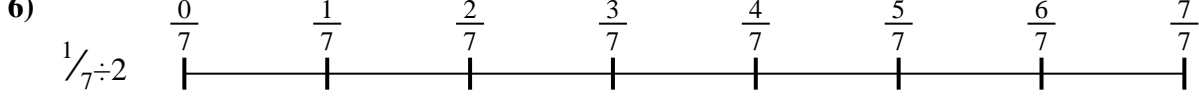
3. \_\_\_\_\_



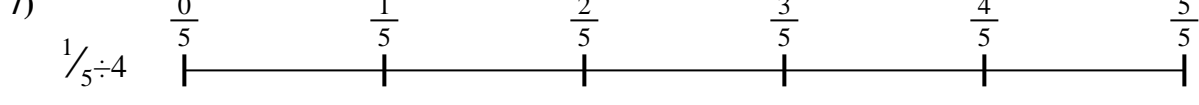
4. \_\_\_\_\_




5. \_\_\_\_\_



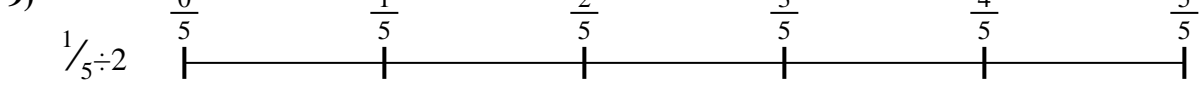
6. \_\_\_\_\_



7. \_\_\_\_\_



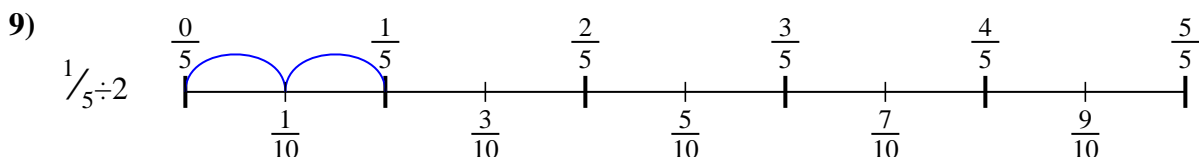
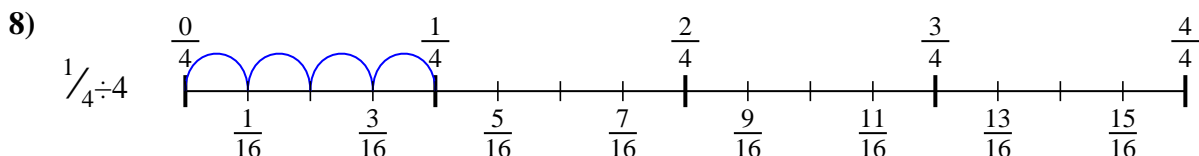
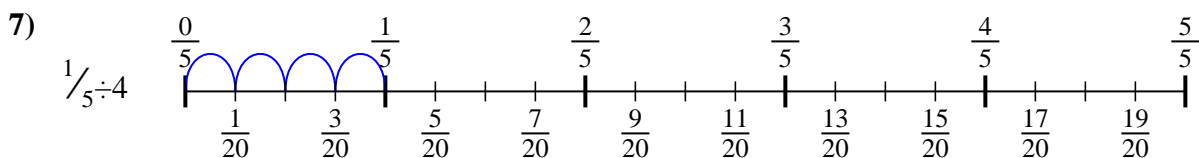
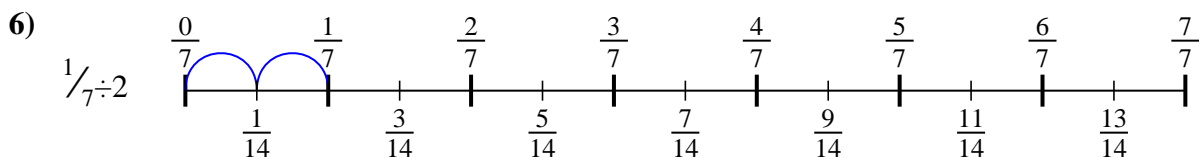
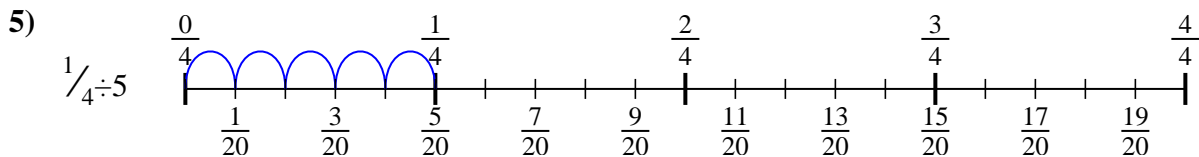
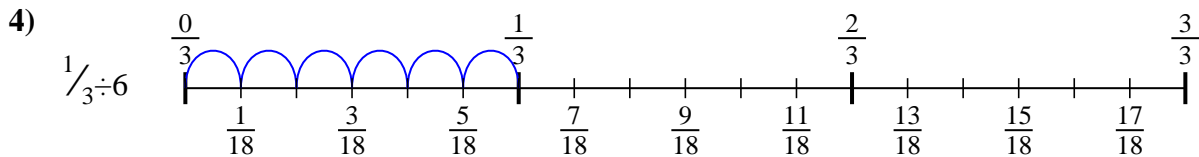
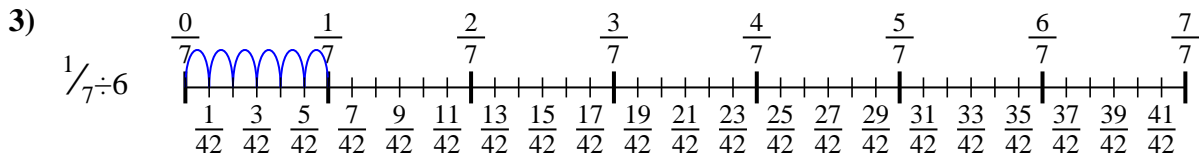
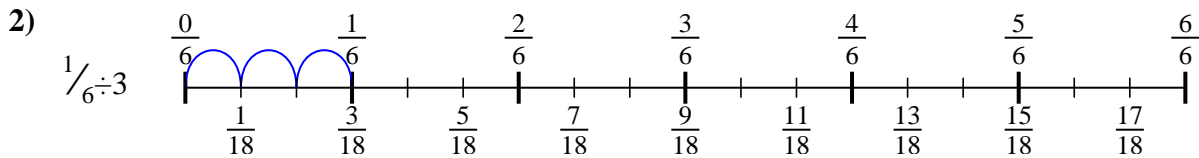
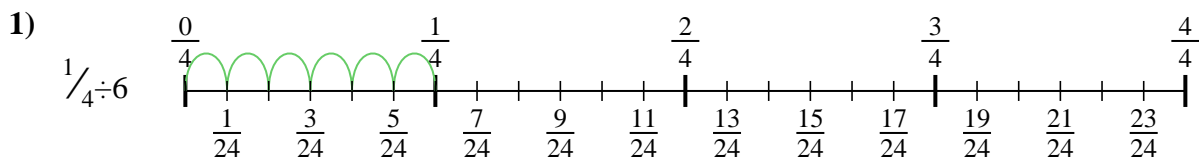
8. \_\_\_\_\_



9. \_\_\_\_\_



Use the numberline to solve each problem. The first is marked for you.



**Answers**

1.  $\frac{1}{24}$

2.  $\frac{1}{18}$

3.  $\frac{1}{42}$

4.  $\frac{1}{18}$

5.  $\frac{1}{20}$

6.  $\frac{1}{14}$

7.  $\frac{1}{20}$

8.  $\frac{1}{16}$

9.  $\frac{1}{10}$



Use the numberline to solve each problem. The first is marked for you.

**Answers**

$\frac{1}{24}$

$\frac{1}{18}$

$\frac{1}{14}$

$\frac{1}{16}$

$\frac{1}{18}$

$\frac{1}{42}$

$\frac{1}{10}$

$\frac{1}{20}$

$\frac{1}{20}$

1)

2)

3)

4)

5)

6)

7)

8)

9)

1. \_\_\_\_\_

2. \_\_\_\_\_

3. \_\_\_\_\_

4. \_\_\_\_\_

5. \_\_\_\_\_

6. \_\_\_\_\_

7. \_\_\_\_\_

8. \_\_\_\_\_

9. \_\_\_\_\_